




NAME \_\_\_\_\_ DATE \_\_\_\_\_

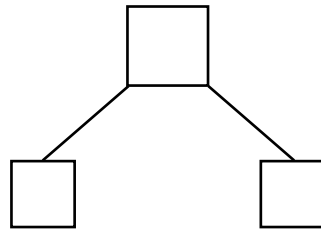
## ADDITION WORD PROBLEMS

Addition word problems using number bonds.

- 1) In a school there are 6 wooden chairs and 7 wooden tables. How many chairs and tables are there in the school?




- b) Draw a complete number bond that goes with this story.



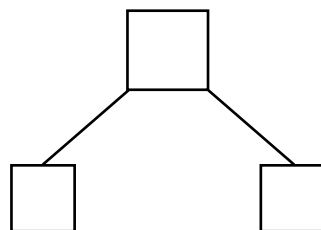
- c) Write an addition sentence that match this story.

$$\underline{\quad} + \underline{\quad} = \underline{\quad}$$

- 2) In a games material kit the physical education teacher found 5 bats and 9 balls. How many total material in the kit?



- b) Draw a complete number bond that goes with this story.



- c) Write an addition sentence that match this story.

$$\underline{\quad} + \underline{\quad} = \underline{\quad}$$